


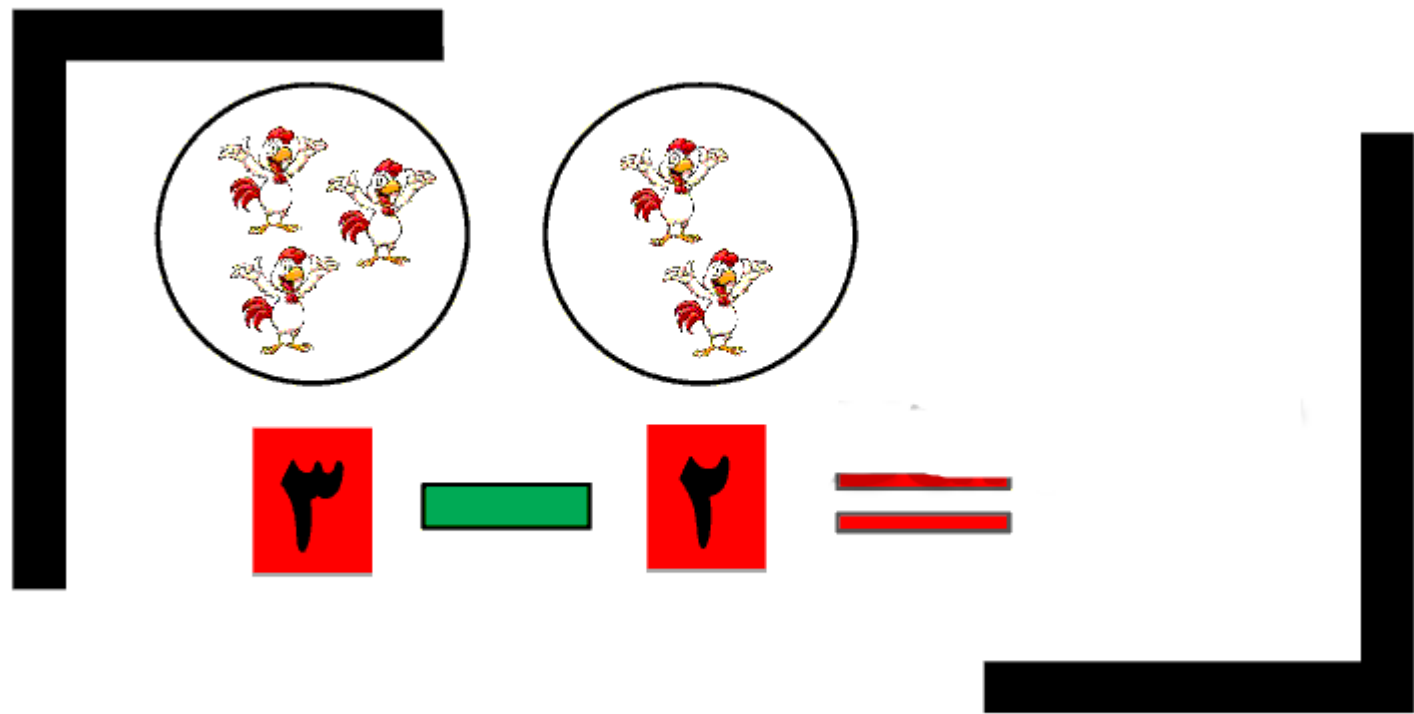




به نام خدا
تمرین ریاضی
تم 13 و 14
کم کردن/اضافه کردن
جمع های ترکیبی

دلبندم، با توجه به شکل ها کم کن.











$$1. - 7 =$$

$$9 - 5 =$$

$$8 - 8 =$$





$$\begin{array}{c} \bullet \bullet \bullet \bullet \\ \bullet \bullet \bullet \end{array} - \begin{array}{c} \bullet \bullet \end{array} = \square$$

$$\begin{array}{c} \bullet \bullet \bullet \bullet \\ \bullet \bullet \bullet \bullet \end{array} - \begin{array}{c} \bullet \bullet \\ \bullet \bullet \end{array} = \square$$

$$\begin{array}{c} \bullet \bullet \bullet \\ \bullet \bullet \bullet \end{array} - \bullet = \square$$

$$\begin{array}{c} \bullet \bullet \bullet \\ \bullet \bullet \bullet \end{array} - \begin{array}{c} \bullet \bullet \\ \bullet \bullet \end{array} = \square$$

$$\begin{array}{c} \bullet \bullet \bullet \bullet \\ \bullet \bullet \bullet \bullet \end{array} - \begin{array}{c} \bullet \bullet \end{array} = \square$$

$$\begin{array}{c} \bullet \bullet \bullet \bullet \\ \bullet \bullet \bullet \bullet \end{array} - \begin{array}{c} \bullet \bullet \\ \bullet \bullet \end{array} = \square$$

$$\begin{array}{c} \bullet \bullet \bullet \bullet \bullet \\ \bullet \bullet \bullet \bullet \bullet \end{array} - \bullet = \square$$

$$\begin{array}{c} \bullet \bullet \bullet \bullet \bullet \\ \bullet \bullet \bullet \bullet \bullet \end{array} - \begin{array}{c} \bullet \bullet \end{array} = \square$$

$$\begin{array}{c} \bullet \bullet \bullet \\ \bullet \bullet \bullet \end{array} - \begin{array}{c} \bullet \bullet \\ \bullet \bullet \end{array} = \square$$











$$\begin{array}{c} \bullet \bullet \bullet \\ \bullet \bullet \bullet \end{array} - \begin{array}{c} \bullet \bullet \bullet \\ \bullet \bullet \bullet \end{array} = \square$$

$$\begin{array}{c} \bullet \bullet \\ \bullet \bullet \end{array} - \begin{array}{c} \bullet \bullet \bullet \end{array} = \square$$

$$\begin{array}{c} \bullet \bullet \\ \bullet \bullet \end{array} - \begin{array}{c} \bullet \bullet \\ \bullet \bullet \end{array} = \square$$





	+		=	
	+		=	
	+		=	
	+		=	
	+		=	



دلبندم، جمع و تفریق هایی را که جوابشان یکی ست به هم وصل کن

$6 \text{ bananas} - 2 \text{ raspberries} =$

$5 \text{ pumpkins} + 4 \text{ bananas} =$

$4 \text{ glasses of orange juice} + 2 \text{ raspberries} =$

$8 \text{ watermelon slices} - 2 \text{ raspberries} =$

$8 \text{ raspberries} - 2 \text{ raspberries} =$

$2 \text{ raspberries} + 4 \text{ bananas} =$

$6 \text{ watermelon slices} + 2 \text{ raspberries} =$

$8 \text{ watermelon slices} - 1 \text{ watermelon slice} =$







$$9 - 2 =$$

$$7 + 2 =$$

$$2 + 7 =$$

$$6 - 1 =$$

$$1 + 5 =$$

$$5 + 1 =$$

$$5 - 2 =$$

$$3 + 2 =$$

$$2 + 3 =$$

$$10 - 3 =$$

$$7 + 3 =$$

$$3 + 7 =$$

