


1. Write the time :



a. _____



b. _____



c. _____



d. _____




e. _____




f. _____

2. Draw the time :


a. It's half past seven.




b. It's a half past eight.




c. It's half past two.




d. It's a half past eleven.




e. It's a half past one.




f. It's a half past four.



g. It's a half past twelve.



h. It's a half past nine.



i. It's a half past ten.

