








\*Write the names of the ones that you know

### 2D Shapes

| Shape   | Name | Sides | Corners |
|---|------|-------|---------|
|    |      |       |         |
|    |      |       |         |
|   |      |       |         |
|  |      |       |         |
|  |      |       |         |
|  |      |       |         |
|  |      |       |         |

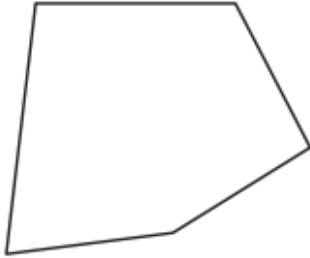
Name : \_\_\_\_\_

## Regular & Irregular Polygons

Sheet 1

Classify each polygon as regular or irregular.

1)



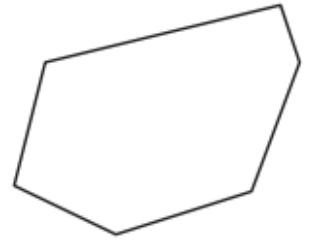
\_\_\_\_\_

2)



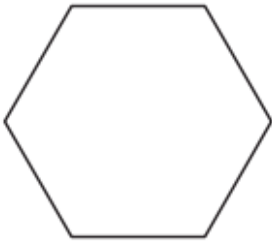
\_\_\_\_\_

3)



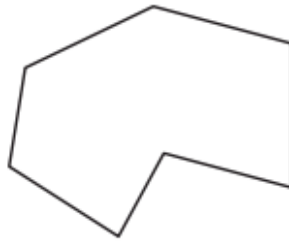
\_\_\_\_\_

4)



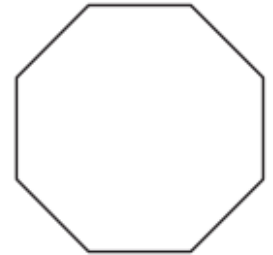
\_\_\_\_\_

5)



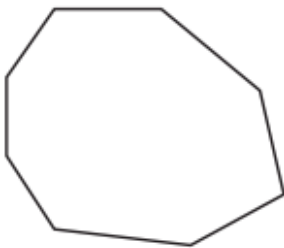
\_\_\_\_\_

6)



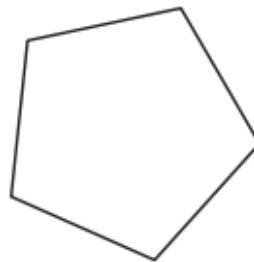
\_\_\_\_\_

7)



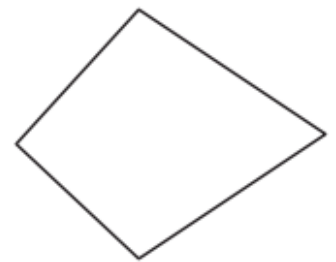
\_\_\_\_\_

8)



\_\_\_\_\_

9)



\_\_\_\_\_

10)



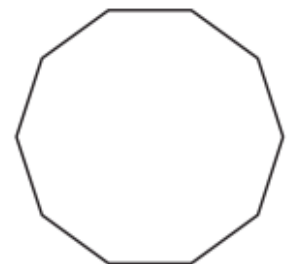
\_\_\_\_\_

11)



\_\_\_\_\_

12)



\_\_\_\_\_

Color the quadrilaterals.

