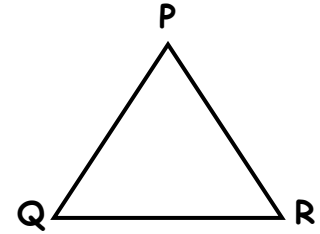
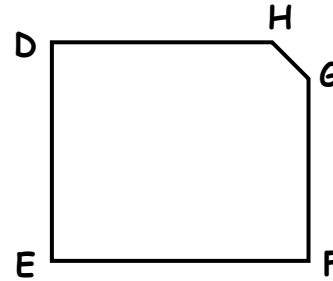
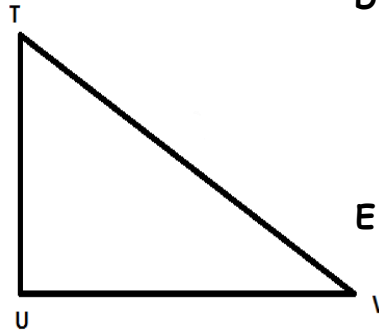


1. Look and write which shapes have got

A. 3 right angles? _____

B. no right angles? _____

C. 1 right angle? _____



2. Look at this shape and name:

A. horizontal sides _____

B. vertical sides _____

C. perpendicular sides _____

