

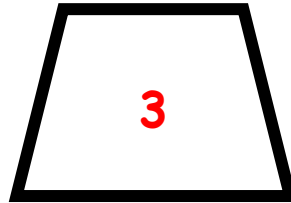
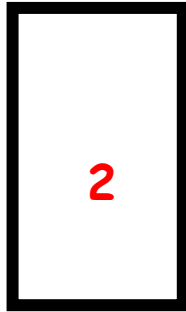



A. Choose and write the name of each shape.

trapezium rectangle rhombus square



B. Look and answer.

Which shapes have got

1. two pairs of parallel sides? _____
2. one pair of parallel sides? _____
3. four right angles? _____

