

A. Choose and write the name of each shape.



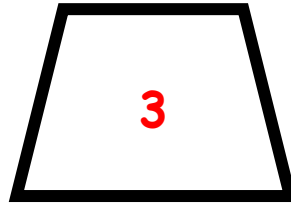
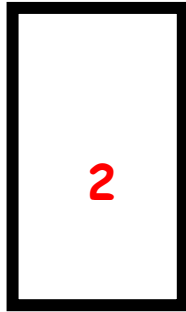

trapezium

rectangle

kite

rhombus

square



B. Look and answer.

Which shapes have got

1. two pairs of parallel sides? _____

2. one pair of parallel sides? _____

3. four right angles? _____

