

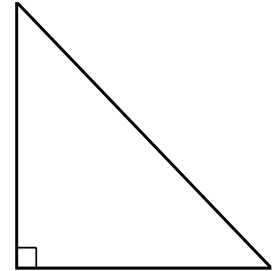
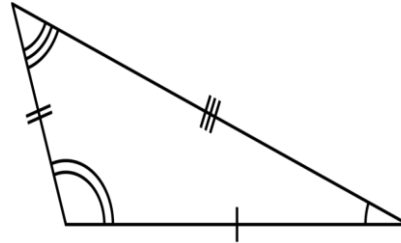
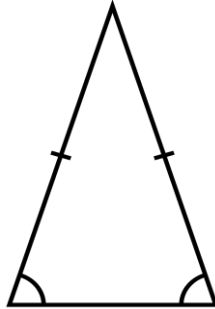
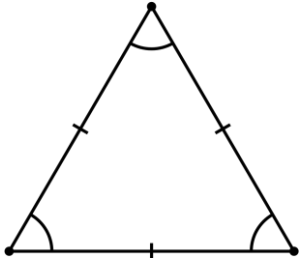
A. Choose and write the name of each triangle.

right-angled triangle

scalene triangle

equilateral triangle

isosceles triangle



\_\_\_\_\_

\_\_\_\_\_

\_\_\_\_\_

\_\_\_\_\_

B. Look and answer.

1. What's the name of this rectangle? \_\_\_\_\_

2. What are the perpendicular sides?  
\_\_\_\_\_

