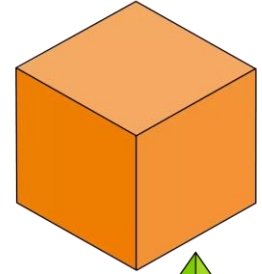
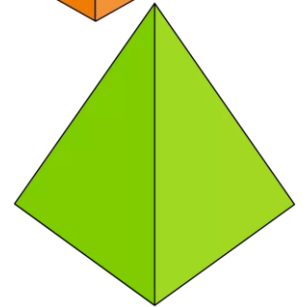


Find and write examples for:

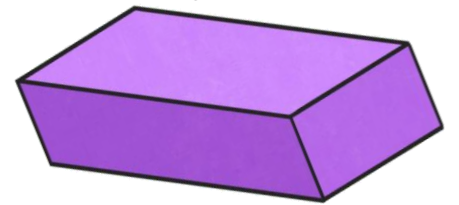
1. cube _____



2. pyramid _____



3. rectangular prism _____



4. triangular prism _____

