


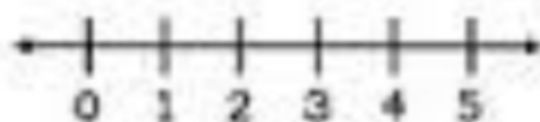
Name \_\_\_\_\_

# number lines

$2 + 3 = \square$



$4 + 1 = \square$



$1 + 2 = \square$



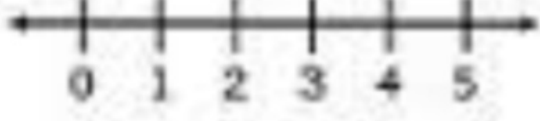
$3 + 2 = \square$



$0 + 5 = \square$



$3 + 1 = \square$



This was:  
(Circle one)

Easy

Just Right

Hard