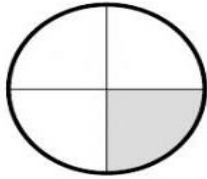


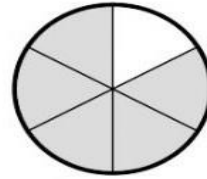
A. Look and write the fractions.

1



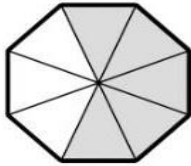
: \_\_\_\_\_

2




: \_\_\_\_\_

3



: \_\_\_\_\_

4



: \_\_\_\_\_

B. Look at A again and write the decimal numbers and percentages.

1

\_\_\_\_\_  
\_\_\_\_\_

2

\_\_\_\_\_  
\_\_\_\_\_

3

\_\_\_\_\_  
\_\_\_\_\_

4

\_\_\_\_\_  
\_\_\_\_\_