

**Alavi**

Name: .....

Level:

Date:

No:

Read and write

Do you like milk?

Do you like juice?

Do you like water?

Does he like sandwich?

Does he like meat?

Does he like cheese?


Does she like vegetables?

Does she like cake?

Does she like salad?


## \* 2.2. How many?

Count how many shells there are.



56

How many counters are there?



21

How many marbles can you find?



45

Count the number of beads.



93

Use a 100 square to help you.

|    |    |    |    |    |    |    |    |    |     |
|----|----|----|----|----|----|----|----|----|-----|
| 1  | 2  | 3  | 4  | 5  | 6  | 7  | 8  | 9  | 10  |
| 11 | 12 | 13 | 14 | 15 | 16 | 17 | 18 | 19 | 20  |
| 21 | 22 | 23 | 24 | 25 | 26 | 27 | 28 | 29 | 30  |
| 31 | 32 | 33 | 34 | 35 | 36 | 37 | 38 | 39 | 40  |
| 41 | 42 | 43 | 44 | 45 | 46 | 47 | 48 | 49 | 50  |
| 51 | 52 | 53 | 54 | 55 | 56 | 57 | 58 | 59 | 60  |
| 61 | 62 | 63 | 64 | 65 | 66 | 67 | 68 | 69 | 70  |
| 71 | 72 | 73 | 74 | 75 | 76 | 77 | 78 | 79 | 80  |
| 81 | 82 | 83 | 84 | 85 | 86 | 87 | 88 | 89 | 90  |
| 91 | 92 | 93 | 94 | 95 | 96 | 97 | 98 | 99 | 100 |

Draw 23 of something.



20



76 comes after 75 and before 77.



76 comes between 75 and 77.



Write the missing numbers.


|    |    |    |    |    |    |    |    |    |     |
|----|----|----|----|----|----|----|----|----|-----|
| 1  | 2  | 3  | 4  | 5  | 6  | 7  | 8  | 9  | 10  |
| 11 | 12 | 13 | 14 | 15 | 16 | 17 | 18 | 19 | 20  |
| 21 | 22 | 23 | 24 | 25 | 26 | 27 | 28 | 29 | 30  |
| 31 | 32 | 33 | 34 | 35 | 36 | 37 | 38 | 39 | 40  |
| 41 | 42 | 43 | 44 | 45 | 46 | 47 | 48 | 49 | 50  |
| 51 | 52 | 53 | 54 | 55 | 56 | 57 | 58 | 59 | 60  |
| 61 | 62 | 63 | 64 | 65 | 66 | 67 | 68 | 69 | 70  |
| 71 | 72 | 73 | 74 | 75 | 76 | 77 | 78 | 79 | 80  |
| 81 | 82 | 83 | 84 | 85 | 86 | 87 | 88 | 89 | 90  |
| 91 | 92 | 93 | 94 | 95 | 96 | 97 | 98 | 99 | 100 |


Talk about 87. (Use before, after and between)

**\* 2.5. Explore Subtraction**

Use ○. Show the story.


Write the number sentence.

1) There are 8 .

6  fly away.

How many are left?


.....8..... - .....6..... = .....2..... are left.

2) There are 6 .

6  slide away.

How many are left?


....6... - ...6... = ...0... are left.

3) There are 7 .

4  run away.

How many are left?

.....7... - .....4... = ...3..... are left.

4) There are 9 .

3  run away.

How many are left?

.....9... - ....3... = 6..... are left.



**Problem Solving: Critical Thinking**

Tell a math story about the picture.

Write the number sentence.

.....5..... - .....2..... = .....3.....

There are 5 bees. 2 bees fly away.  
How many are left?

