

Alavi

Name:

Level:

Date:

No:

Spelling No.35 -- -- **(Second Semester)**

1.

2.

3.

4.

5.

Alavi

Name:

Level:

Date:

No:

Read and write.

box-

fox-

x-ray-

six-

taxi-

chicken-

chips-

bunch-

kitchen-

Alavi

Name:

Level:

Date:

No:

Read and write.

bench-

cheese-

fish-

shell-

sheep-

shirt-

shelf-

brush-

short-

*** 3.4. Find the difference**

Find the difference between each set of objects below.

Write the matching number sentence.

A

$9 - 4 = 5$ ✓

B

$10 - 6 = 4$ ✓

C

$8 - 5 = 3$ ✓


D

$14 - 8 = 6$ ✓

E

$13 - 9 = 4$ ✓

Look and Learn
 difference: how many more is needed to make the smaller amount the same as the larger amount, for example:



$6 - 4 = 2.$

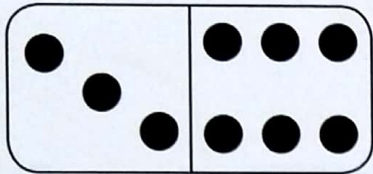
The difference between 6 and 4 is 2.

Use a straight edge to make a line at the end of the smaller row. Then count how many objects come after the line in the longer row.

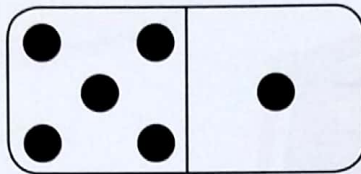
Draw two different pictures to show a difference of four.

Remember

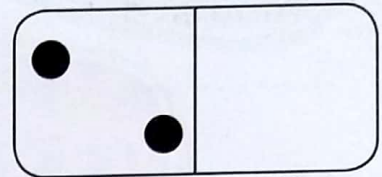
Find the difference by counting on from the smaller number or counting back from the larger number.



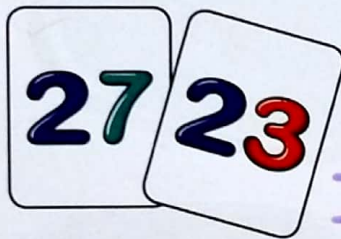
The difference is 3



The difference is 4



The difference is 2



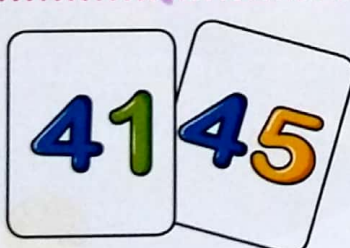
The difference is

$$\begin{array}{r} 27 \\ -23 \\ \hline 04 \end{array}$$



The difference is

$$\begin{array}{r} 39 \\ -34 \\ \hline 05 \end{array}$$




The difference is

$$\begin{array}{r} 45 \\ -41 \\ \hline 04 \end{array}$$



The difference is

$$\begin{array}{r} 31 \\ -29 \\ \hline 02 \end{array}$$



The difference is

$$\begin{array}{r} 42 \\ -38 \\ \hline 04 \end{array}$$



The difference is

$$\begin{array}{r} 53 \\ -47 \\ \hline 06 \end{array}$$

Awesome!
1401, 1, 27

35