



TERM II

TEACHER:

SUBJECT: Geometry.

Grade:  
third

ST.4-45-45.22

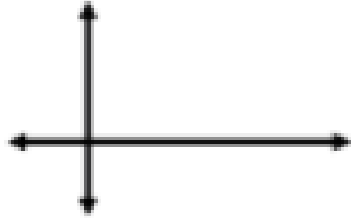
Complete the blanks spaces with the respective name of the lines.

1.



\_\_\_\_\_

2.



\_\_\_\_\_

3.




\_\_\_\_\_

4.



\_\_\_\_\_

5.



\_\_\_\_\_

6.



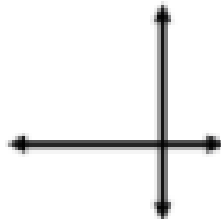
\_\_\_\_\_

7.



\_\_\_\_\_

8.



\_\_\_\_\_