
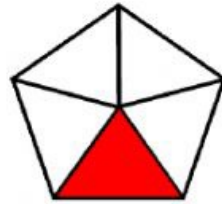


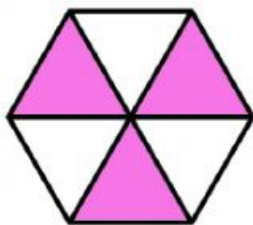
_____ equal parts

_____ equal parts



_____ equal parts

_____ equal parts




_____ equal parts

Equal and Unequal


Choose the correct answer



=	≠
---	---



=	≠
---	---



=	≠
---	---



=	≠
---	---



=	≠
---	---

