

1. Read and write.

Mr. Jack has bought 2 boxes of chocolate bars for 3 children. Each box has got 6 chocolate bars. The children are going to share bars equally.

A . How many chocolate bars will each child get?

4

B. Write an expression to show the order of the operations you used.

$$6 * 2 = 12$$

$$12 \div 3 = 4$$

2. Read and circle.

A. A temperature less than 0 is positive / **negative**

B. 0 is greater than / less than / **between** +4 and -4

C. GMT is the time standard measured at **Greenwich**/London.

3. You have been given 55.50 dollars. Look at the items and write. 2 items that you like.

A . What will you buy? **I will buy a skirt and a shirt.**

B. Complete the receipt.

Item	Price
skirt	30
shirt	14.10
CASH	55.50
CHANGE DUE	11.40

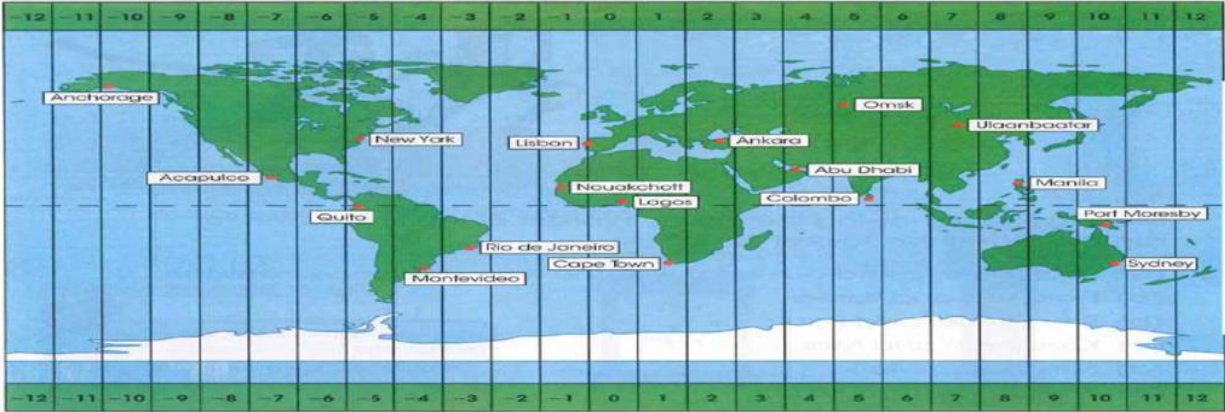
Jeans: 25.20\$

Skirt : 30\$

Coat : 20.05\$

Shirt :14.10\$

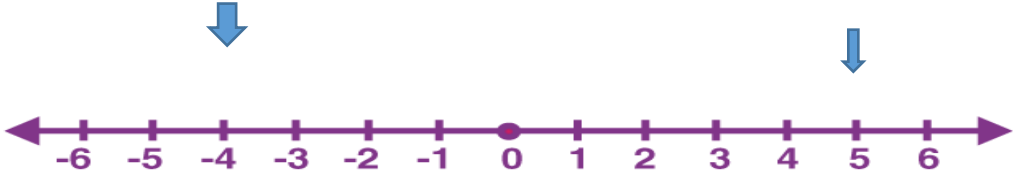
4. Here is the different time zones. Look carefully and write.




. What is the time difference between New York and Lisbon?  
New York is 4.5 hours before Lisbon.

. If it was 18 in New York, it would be ...22:30... in the Lisbon

5. Which numbers are marked on the number line ? -4 and 5



6. Name the shapes. Write the properties.



trapezium

It has 4 angles.  
It has 2 parallel sides.



rectangle

It has 4 equal angles.  
It has 4 right angles.