
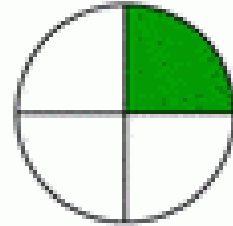
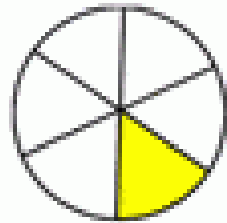
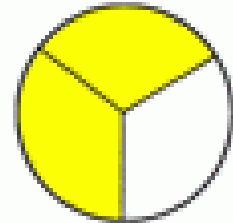
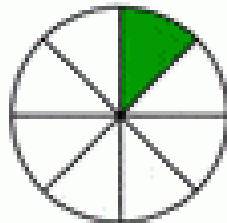
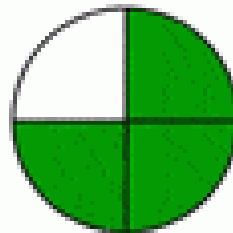
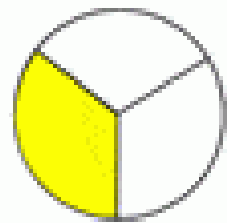
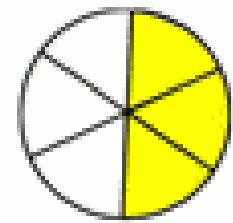


Write the fraction of the shape that is filled in.


$$\frac{1}{2}$$

$$\frac{1}{4}$$

$$\frac{1}{6}$$

$$\frac{2}{3}$$

$$\frac{1}{8}$$

$$\frac{3}{4}$$

$$\frac{2}{3}$$

$$\frac{3}{6}$$