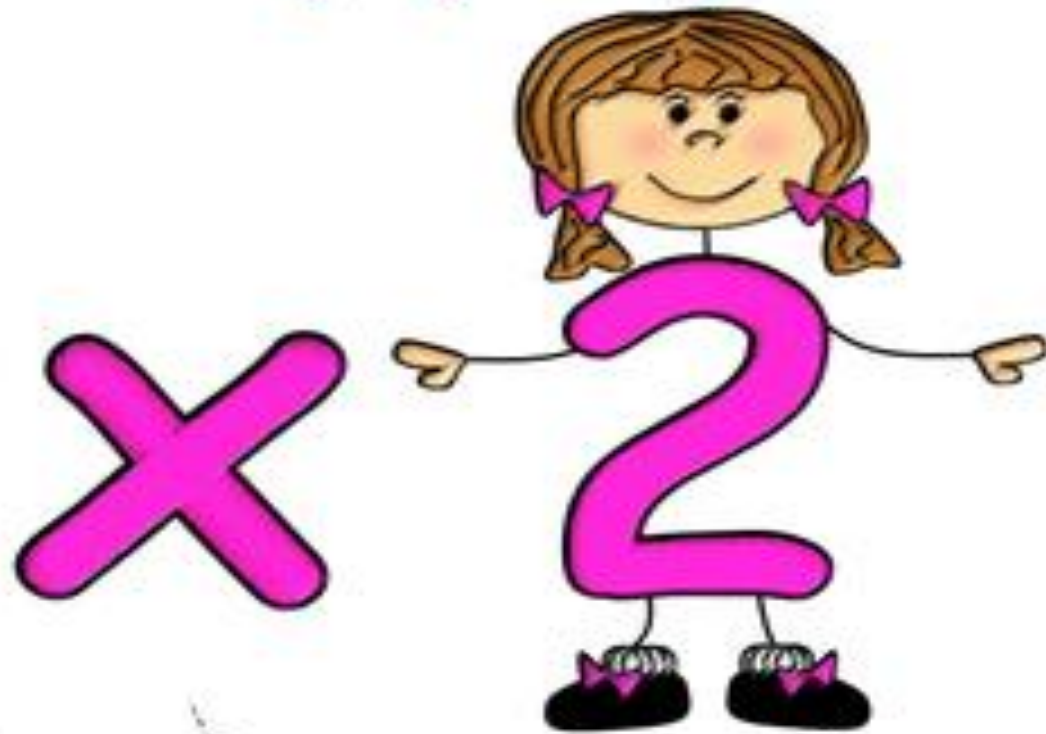


Multiply By Two



2 groups of 3 in each group



2 times 3 equals 6.


3 groups of 2 in each group



$$2 \times 3 = 6$$


3 times 2 equals 6.

4 groups of 2 in each group



$$2 + 2 + 2 + 2 = 8$$

$$2 \times 4 = 8$$




or

4 times 2 equals 8.



2 times 4 equals 8

Each group has equal number of objects.



5 rows of 2 in each group

$$2+2+2+2+2=10$$

$$2 \times 5 = 10$$

2 times 5 equals 10

2 times 6 equals 12



Multiplying By 2 Worksheet

Answer the questions below.

$0 \times 2 = \square$

$7 \times 2 = \square$

$1 \times 2 = \square$

$8 \times 2 = \square$

$2 \times 2 = \square$

$9 \times 2 = \square$

$3 \times 2 = \square$

$10 \times 2 = \square$

$4 \times 2 = \square$

$11 \times 2 = \square$

$5 \times 2 = \square$

$12 \times 2 = \square$





$6 \times 2 = \square$



Multiply By Three



$$3 \times 4 = 12$$



3 times 4 equals 12



3 times 4 equals 12

Multiplying By 3 Worksheet

Answer the questions below.

$0 \times 3 = \square$

$1 \times 3 = \square$

$2 \times 3 = \square$

$3 \times 3 = \square$

$4 \times 3 = \square$

$5 \times 3 = \square$

$6 \times 3 = \square$

$7 \times 3 = \square$


$8 \times 3 = \square$

$9 \times 3 = \square$


$10 \times 3 = \square$

$11 \times 3 = \square$


$12 \times 3 = \square$



A school has 2 buses. 3 children are put on each bus for a trip.






How many children does the school take on the trip?





Multiply By Four






$$4+4+4=12$$

$$3\times 4=12$$

4 times 3 equals 12



$$4 + 4 + 4 = 12$$

or

$$4 \times 3 = 12$$

4 times 3 equals 12

Multiplying By 4 Worksheet

Answer the questions below.

$0 \times 4 = \square$

$7 \times 4 = \square$

$1 \times 4 = \square$

$8 \times 4 = \square$

$2 \times 4 = \square$

$9 \times 4 = \square$

$3 \times 4 = \square$

$10 \times 4 = \square$


$4 \times 4 = \square$

$11 \times 4 = \square$

$5 \times 4 = \square$

$12 \times 4 = \square$

$6 \times 4 = \square$

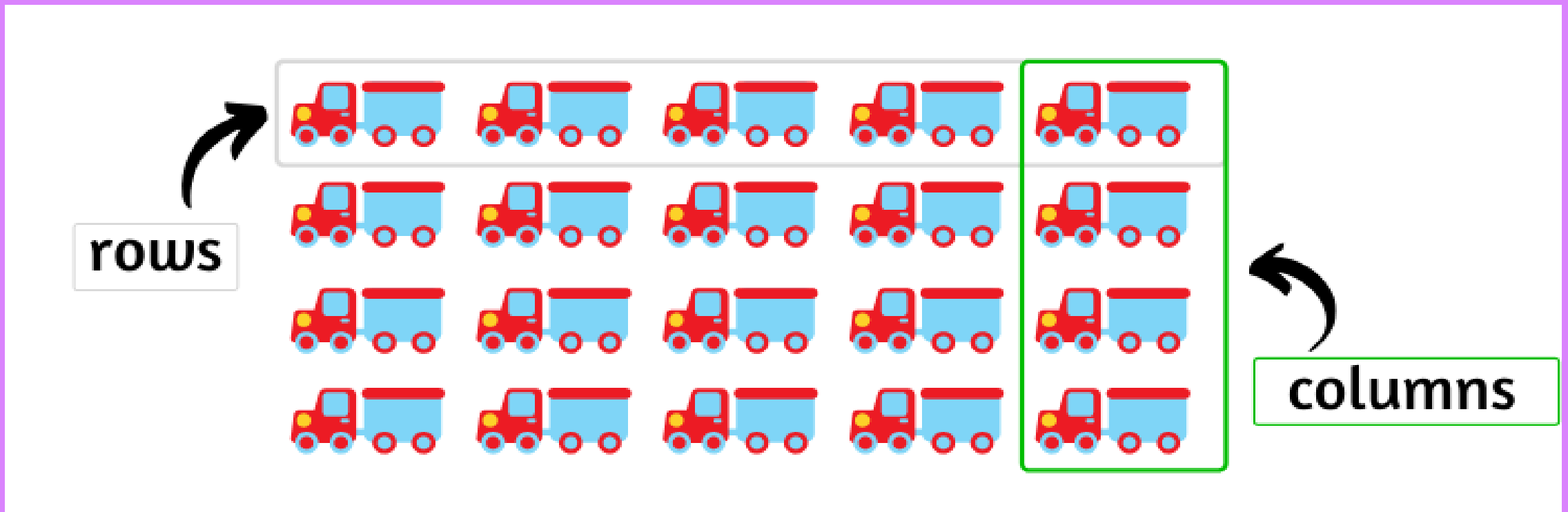


Multiply By Five

x

5





5 rows of 4 columns

$$5 \times 4 = 20$$

5 times 4 equals 20

Multiplying By 5 Worksheet

Answer the questions below.

$0 \times 5 = \square$

$7 \times 5 = \square$

$1 \times 5 = \square$

$8 \times 5 = \square$

$2 \times 5 = \square$

$9 \times 5 = \square$

$3 \times 5 = \square$

$10 \times 5 = \square$

$4 \times 5 = \square$

$11 \times 5 = \square$

$5 \times 5 = \square$

$12 \times 5 = \square$

$6 \times 5 = \square$



Multiply By Six



Multiplying By 6 Worksheet

Answer the questions below.

$0 \times 6 = \square$

$7 \times 6 = \square$

$1 \times 6 = \square$

$8 \times 6 = \square$

$2 \times 6 = \square$

$9 \times 6 = \square$

$3 \times 6 = \square$

$10 \times 6 = \square$

$4 \times 6 = \square$

$11 \times 6 = \square$

$5 \times 6 = \square$

$12 \times 6 = \square$

$6 \times 6 = \square$

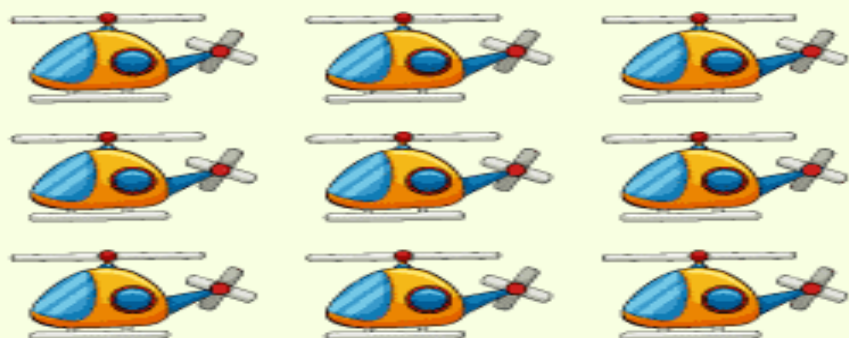


BASIC MULTIPLICATION WORKSHEETS

Complete the equation to describe the array



$$4 \times \square = 8$$





$$\square \times 3 = 9$$




$$\square \times 2 = 4$$

A school has 2 buses. ● children are put on each bus for a trip.



How many children does the school take on the trip?





Multiply By Seven



X

Multiplying By 7 Worksheet

Answer the questions below.

$0 \times 7 = \square$

$7 \times 7 = \square$

$1 \times 7 = \square$

$8 \times 7 = \square$

$2 \times 7 = \square$

$9 \times 7 = \square$

$3 \times 7 = \square$

$10 \times 7 = \square$

$4 \times 7 = \square$

$11 \times 7 = \square$

$5 \times 7 = \square$

$12 \times 7 = \square$

$6 \times 7 = \square$



Multiply By Eight



Multiplying By 8 Worksheet

Answer the questions below.

$0 \times 8 = \square$

$7 \times 8 = \square$

$1 \times 8 = \square$

$8 \times 8 = \square$

$2 \times 8 = \square$

$9 \times 8 = \square$

$3 \times 8 = \square$

$10 \times 8 = \square$

$4 \times 8 = \square$

$11 \times 8 = \square$

$5 \times 8 = \square$

$12 \times 8 = \square$

$6 \times 8 = \square$



Multiply By Nine



Multiplying By 9 Worksheet

Answer the questions below.

$0 \times 9 = \square$

$7 \times 9 = \square$

$1 \times 9 = \square$

$8 \times 9 = \square$

$2 \times 9 = \square$

$9 \times 9 = \square$

$3 \times 9 = \square$

$10 \times 9 = \square$

$4 \times 9 = \square$

$11 \times 9 = \square$

$5 \times 9 = \square$

$12 \times 9 = \square$

$6 \times 9 = \square$



Multiply By Ten



Multiplying By 10 Worksheet

Answer the questions below.

$0 \times 10 = \square$

$7 \times 10 = \square$

$1 \times 10 = \square$

$8 \times 10 = \square$

$2 \times 10 = \square$

$9 \times 10 = \square$

$3 \times 10 = \square$

$10 \times 10 = \square$


$4 \times 10 = \square$

$11 \times 10 = \square$


$5 \times 10 = \square$

$12 \times 10 = \square$

$6 \times 10 = \square$



A school has 2 buses. ● children are put on each bus for a trip.



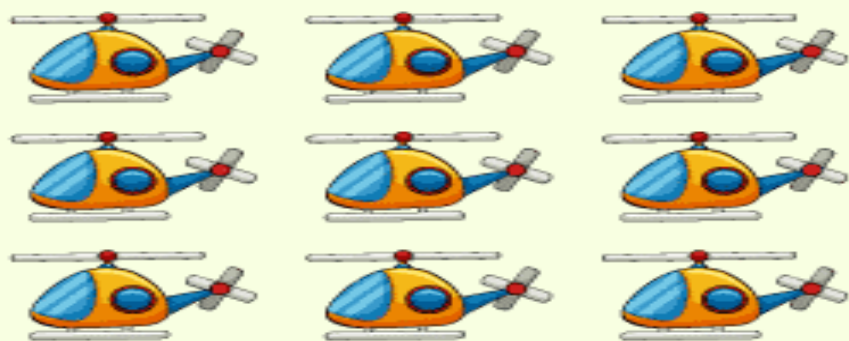
How many children does the school take on the trip?

BASIC MULTIPLICATION WORKSHEETS

Complete the equation to describe the array




$$4 \times \square = 8$$



$$\square \times 3 = 9$$



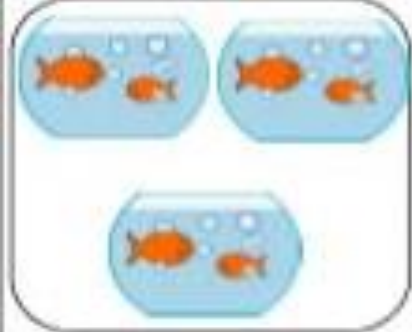
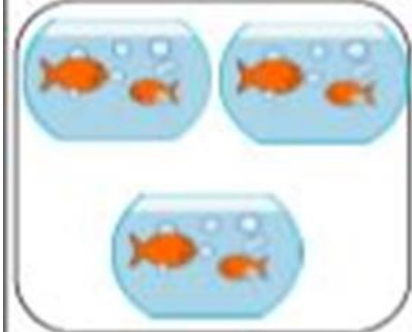
$$\square \times 2 = 4$$



There are groups of donuts.

$$\square + \square + \square = 21$$

$$\square \times \square = 21$$



a 3×4

a 4×5

a 3×4

a 3×4

a 4×5

a 3×4

b 2×3

b 5×3

b 2×3

b 2×3

b 5×3

b 2×3

c 2×4

c 3×4

c 6×3

c 2×4

c 3×4

c 6×3



a 2×5

a 5×3

a 5×2

a 2×5

a 5×3

a 5×2

b 6×3

b 3×6

b 2×4

b 6×3

b 3×6

b 2×4

c 5×4

c 4×5

c 2×1

c 5×4

c 4×5

c 2×1

Thank You

Thank You