



## Halving Spots


Share the number of spots equally between each wing. Write how many spots are on each half.




Half of 4 = \_\_\_\_\_




Half of 8 = \_\_\_\_\_




Half of 12 = \_\_\_\_\_



Half of 6 = \_\_\_\_\_



Half of 2 = \_\_\_\_\_



Half of 10 = \_\_\_\_\_