

1. I'm an even number . I'm between 250 and 260.I'm greater than 255 and less than 258 . I have 6 ones.

What number am I?

2. Look at the chart and answer the questions.

A. How many students like grapes?






.....

B. How many students like apple?

.....

C. How many students like banana and apple?

.....

Fruit		Tally
apple		I
strawberry		II
banana		III
orange		
grapes		

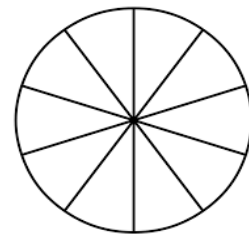
3.Look at the circle and write.

A. Shade 4 parts.

B. write the fraction for parts that are shaded.

C. what is numerator?.....

D. what is denominator?.....



4.Read and circle.

A. Twenty divided by five equals four / five

B. Three times eight equals twenty six / twenty four

C. Half of sixteen is six / eight

D. Double seven is fifteen / fourteen

5. Read and solve the problem.

There are five apples in a plate. How many apples are there in two plates?

I need thirty apples . how many plates should I buy?



