


1.5. Make 10


Use counters to make 10. Make 10 in a different way each time. Draw and colour your counters in the squares.

You will need: counters in two different colours and colouring pencils.


Hint: $9 + 1$ and $1 + 9$ are two ways of making 10.




$$1 + 9 = \square$$




$$\square + \square = \square$$




$$\square + \square = \square$$



$$\square + \square = \square$$



$$\square + \square = \square$$



$$\square + \square = \square$$