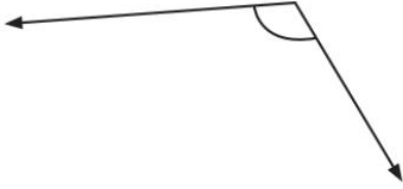


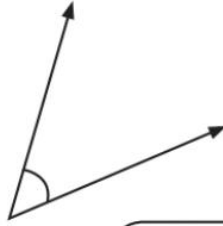
Angles

Using a protractor measure these **angles** and write your answer.

1.



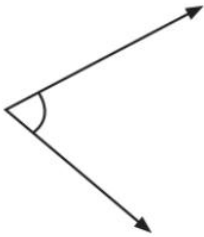
5.



9.



2.



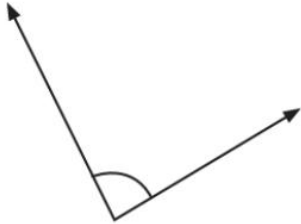
6.



10.



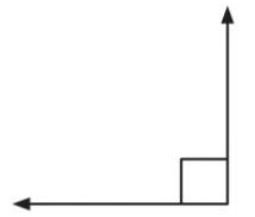
3.



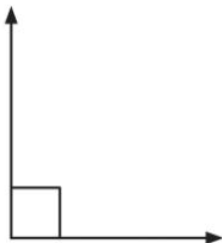
7.



11.



4.



8.



12.

