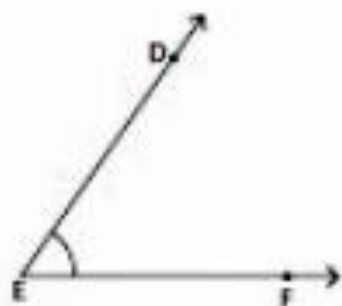


Measure each angle using protractor.

1)



$\angle DEF = \underline{\hspace{2cm}}$

2)



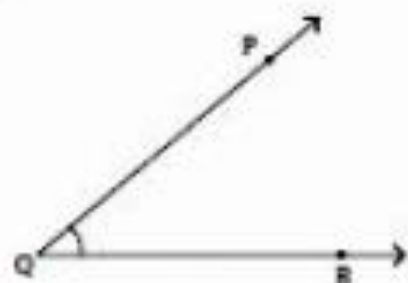
$\angle ABC = \underline{\hspace{2cm}}$

3)



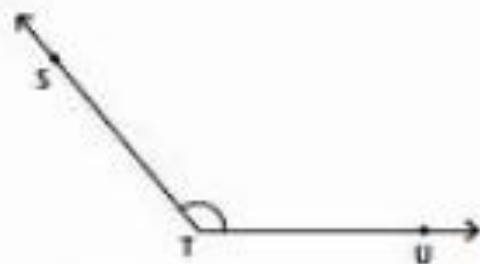
$\angle XYZ = \underline{\hspace{2cm}}$

4)



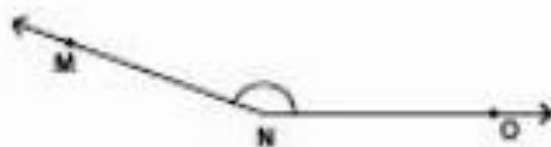
$\angle PQR = \underline{\hspace{2cm}}$

5)



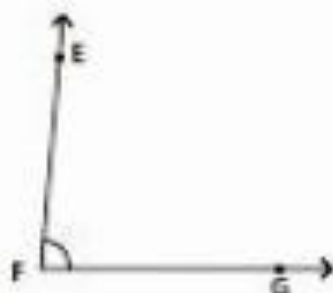
$\angle STU = \underline{\hspace{2cm}}$

6)



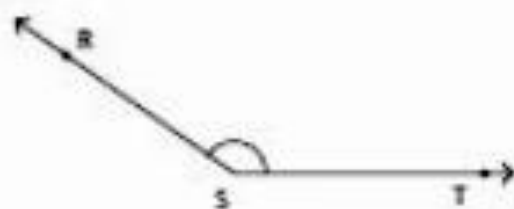
$\angle MNO = \underline{\hspace{2cm}}$

7)



$\angle EFG = \underline{\hspace{2cm}}$

8)



$\angle RST = \underline{\hspace{2cm}}$