


According to the sample draw and
write the square numbers


For 6-7-8.



$$2^2$$

or


$$2 \times 2 = 4$$



$$3^2$$

or


$$3 \times 3 = 9$$



$$4^2$$

or

$$4 \times 4 = 16$$



$$5^2$$

or

$$5 \times 5 = 25$$

Do the multiple problems.

$4 \times 7 = \underline{\hspace{2cm}}$

$7 \times 9 = \underline{\hspace{2cm}}$

$7 \times 4 = \underline{\hspace{2cm}}$

$9 \times 7 = \underline{\hspace{2cm}}$

$6 \times 7 = \underline{\hspace{2cm}}$

