


*** 2.4. Shapes, shapes and more shapes**

Remember

Here are some attributes of shapes.

 The lengths of the sides:

This shape has some sides the same length.



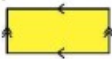
We use hatch marks to show equal lengths.

This shape has all sides the same length.



 The direction of the sides:


This shape has 2 pairs of parallel sides.



We use arrows to show parallel lines.

This shape has no parallel sides.



 We can label each vertex and then name the shape by its vertices.



This is triangle JKL.

It has 3 sides:
JK, JL, and KL

1. Tell which shapes have:

- a) no parallel sides
- b) all sides different lengths
- c) all sides the same length
- d) some parallel sides

