
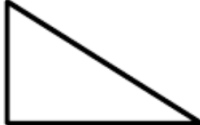


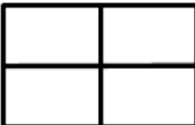


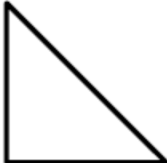







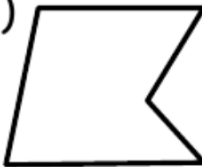
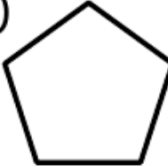
1. How many vertical (V) and horizontal (H) lines are there in each shape?

(a) 	(b) 	(c) 	(d) 	(e) 
V _____	V _____	V _____	V _____	V _____
H _____	H _____	H _____	H _____	H _____

2. Circle the shapes below which have perpendicular lines.

(a) 	(b) 	(c) 	(d) 	(e) 
---	---	---	--	---

3. How many pairs of parallel sides do the shapes below have?

(a) 	(b) 	(c) 	(d) 	(e) 
-----	-----	-----	-----	-----