

* 3.1. Numbers 6 and 7

Let's observe.




6




Six

Let's count.



6



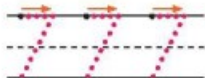

7

Look and trace.




1)



2)

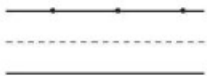



Colour a box as you count.

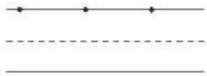


Count and write.

1)



2)



3)

