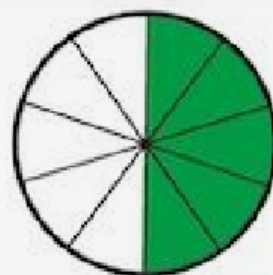
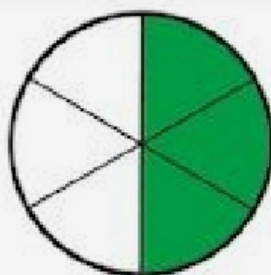

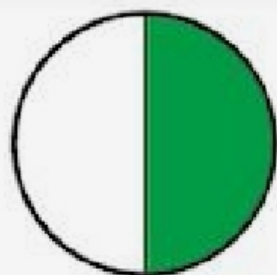
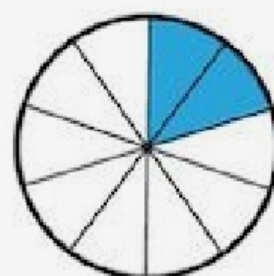
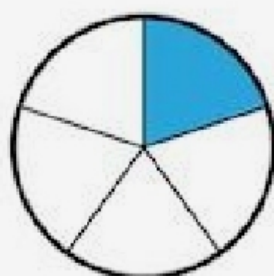
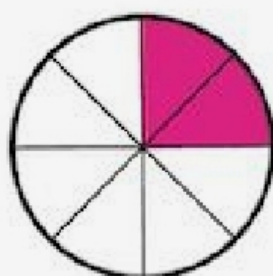
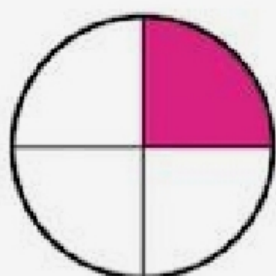


Can you complete the fractions?

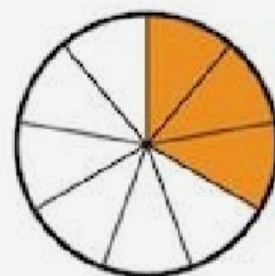
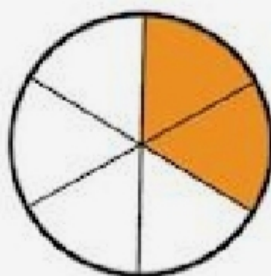


$$\frac{1}{2} = \frac{2}{4} = \frac{3}{6} = \frac{4}{8} = \frac{5}{10}$$

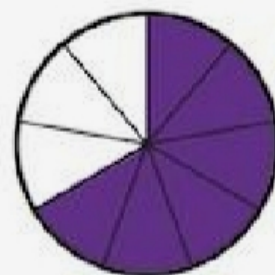


$$\frac{1}{4} = \frac{2}{8}$$

$$\frac{2}{5} = \frac{4}{10}$$



$$\frac{1}{3} = \frac{2}{6} = \frac{4}{10}$$



$$\frac{2}{3} = \frac{4}{6} = \frac{6}{10}$$