



Level:

Basic2



Alavi

Full Name:

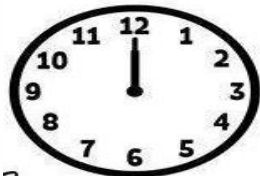
Date:

Topic:

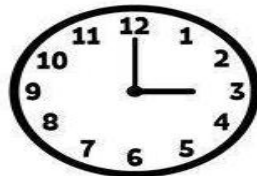
Math1

1403/10/29

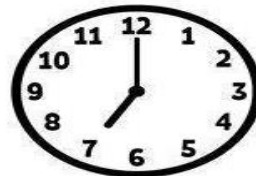
1. Look at each clock and write what the time is.



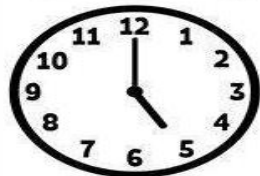
:



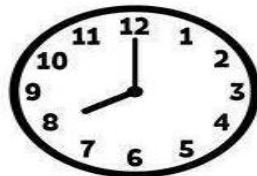
:



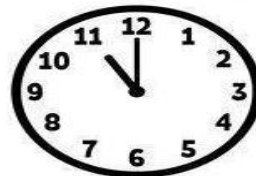
:



:



:



:

2. Draw a line to match each time to each clock.

7:00

5:00

9:00

1:00

10:00



Comment:

