



Level:

ODI2



Alavi



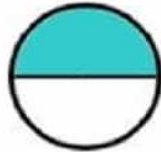
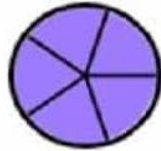
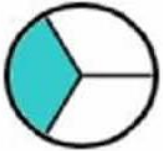
Full Name:

Date:

Topic: Math

1403/11/17

Write a fraction for shapes.



Comment:

