

Name _____

Date _____




RATIO AND PROPORTION SHEET 3


Write down the ratio of one object to the other and then record the proportion relative to the whole set as a fraction.

1)



Ratio of  to  = ___ : ___


Proportion of  =

Proportion of  =

2)





Ratio of  to  = _____


Proportion of  =

Proportion of  =

3)



Ratio of  to  = _____


Proportion of  =


Proportion of  =

4)



Ratio of  to  = _____


Proportion of  =


Proportion of  =

5)



Ratio of  to  = _____


Proportion of  =

Proportion of  =

6)



Ratio of  to  = _____

Proportion of  =

Proportion of  =