



Level:

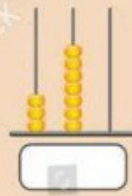
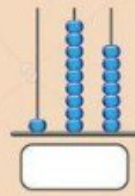
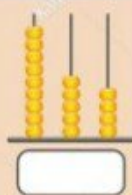
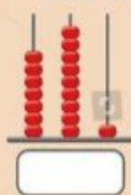
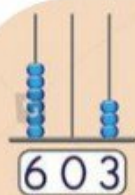


Full Name:

Date:

Topic:

Alavi



Comment:





Level: _____



Full Name: _____

Date: _____

Topic: _____

Alavi

Name _____

Date _____

Greater than, Less than or Equal to

WORKSHEET #4 (0 - 40)

Solve the equations by writing greater than (>), less than (<) or equal to (=)

$$5 \square 3, 5 \square 9, 6 \square 6$$

12 <input type="text"/> 9	4 <input type="text"/> 4	18 <input type="text"/> 29
16 <input type="text"/> 32	26 <input type="text"/> 38	7 <input type="text"/> 7
24 <input type="text"/> 39	7 <input type="text"/> 18	9 <input type="text"/> 5
23 <input type="text"/> 17	15 <input type="text"/> 15	36 <input type="text"/> 39
5 <input type="text"/> 33	19 <input type="text"/> 6	35 <input type="text"/> 26
30 <input type="text"/> 16	29 <input type="text"/> 10	19 <input type="text"/> 36
19 <input type="text"/> 26	20 <input type="text"/> 3	16 <input type="text"/> 22

Comment:

