



Level: _____






Full Name: _____

Date: _____

Topic: Math 3

Alavi

Fruits	Tally Marks
	
	
	

1. How many students chose apples? _____

2. How many students chose bananas? _____

3. How many students chose oranges? _____

4. Which fruit was the most favorite? _____

5. Which fruit was the least favorite? _____

Comment:

