

65      tens      ones

--	--

72      tens      ones

--	--

80      tens      ones

--	--

39      tens      ones

--	--

21      tens      ones

--	--

11      tens      ones

--	--

92      tens      ones

--	--

55      tens      ones

--	--

70      tens      ones

--	--

43      tens      ones

--	--

1) 65

Tens	ones
6	5

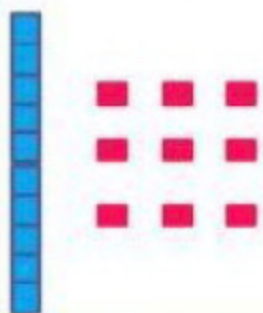
2) 72

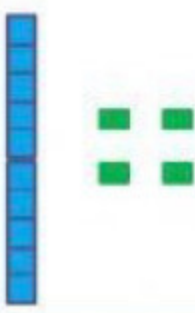
Tens	ones
7	2


1) 65 has 6 tens and 5 ones.

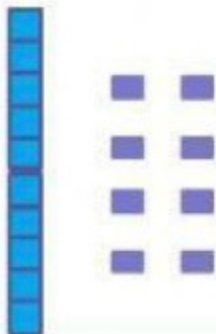
2) 72 has 7 tens and 2 ones.


1. Count each set of blocks using place value. Drag and match the word form to the correct picture.























2 Tens	1 ten and 7 ones	7 ones
1 ten and 4 ones	8 ones	1 ten and 9 ones
9 ones	1 ten and 6 ones	1 ten and 8 ones