



Level:  
Movers 2




Alavi

Full Name: \_\_\_\_\_

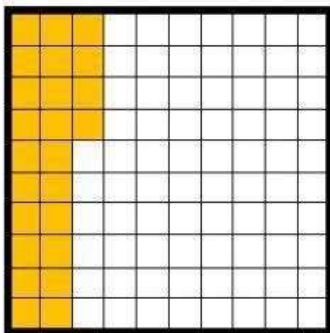
Date: \_\_\_\_\_

Topic: Math 5

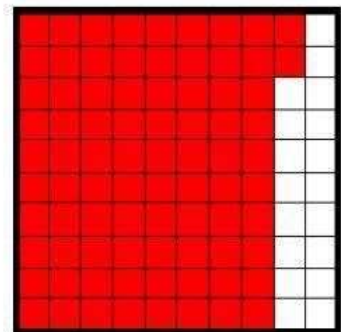
❖ What fraction, percentage and decimal does each 100-square grid show?



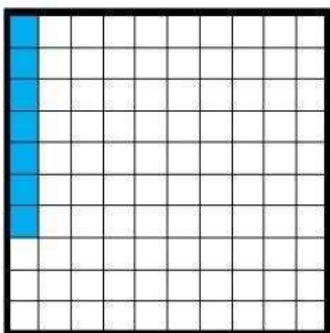
$$\frac{\quad}{100} = \square$$




$$\frac{\quad}{100} = \square$$




$$\frac{\quad}{100} = \square$$



$$\frac{\quad}{100} = \square$$



$$\frac{\quad}{100} = \square$$



$$\frac{\quad}{100} = \square$$

Comment:

\_\_\_\_\_

\_\_\_\_\_

\_\_\_\_\_

