

* 3.3. Calculation

Remember




You can add numbers in any order.

You will need: a 1-6 dice or Resource 3, a selection of counters (1 for each player and some to cover the spots).

	START	$7 + 6$	$20 - 9$	$14 + 3$
$16 - 12$				
$10 - 8$				
$17 - 14$				
	$9 + 11$	$13 - 7$	$16 - 4$	$10 - 2$

You can play this game on your own or with a friend. Take turns to throw the dice and move on that number of spaces. Complete each calculation. Put a counter on the spot on the leopard that matches your answer.

Some spots may be the answer to more than one calculation. If you land on a paw print you can choose any number to cover. Who will cover the last spot on the leopard?

$8 + 2$	$12 + 4$	$6 + 7$	$20 - 11$	
				 $3 + 14$
				$2 + 8$
				$4 + 12$
$17 - 3$	$11 + 9$		$13 - 6$	$20 - 11$