












Count the number of circles and decide if it is an even number or an odd number.

- |    |   |                             |
|----|---|-----------------------------|
| Ex |    | .....8..... <b>even</b> odd |
| 1  |    | ..... even odd              |
| 2  |    | ..... even odd              |
| 3  |    | ..... even odd              |
| 4  |  | ..... even odd              |
| 5  |  | ..... even odd              |
| 6  |  | ..... even odd              |
| 7  |  | ..... even odd              |
| 8  |  | ..... even odd              |
| 9  |  | ..... even odd              |
| 10 |  | ..... even odd              |