

* 4.1. More and Fewer

Use



	Write how many	Make a train with	Write how many now
1)	 3	1 more	
2)		2 fewer	
3)		2 more	
4)		1 fewer	
5)		2 fewer	

Circle the number that is 2 more than 3.


3







5

6

1

* 4.1. More and Fewer

Use 

	Write how many	Make a train with	Write how many now
1)		1 more	
			4
2)		2 fewer	
	5		3
3)		2 more	
	2		4
4)		1 fewer	
	6		5
5)		2 fewer	
	4		2

Circle the number that is 2 more than 3.

3 5 6 1