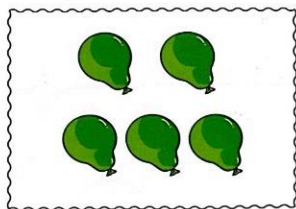



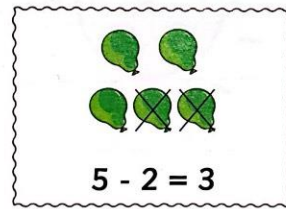
Show subtraction



Show how many.



Cross out to subtract.



$$5 - 2 = 3$$

Write the number sentence.

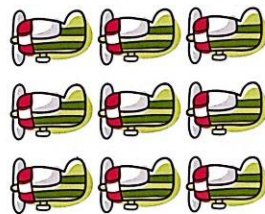
Cross out. Subtract.

1)




$$6 - 4 = 2$$

2)



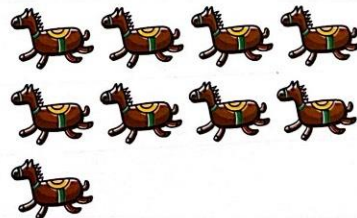
$$9 - 4 = \dots 5 \dots$$

3)



$$8 - 7 = \dots 1 \dots$$

4)



$$9 - 3 = \dots 6 \dots$$