



**Remember**


Find the difference by counting on from the smaller number or counting back from the larger number.



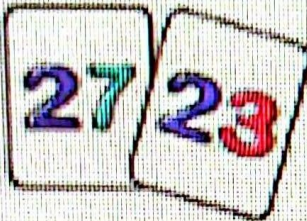
The difference is 3



The difference is 4



The difference is 2



The difference is  
4




The difference is  
5




The difference is  
4



The difference is  
2



The difference is  
4



The difference is  
6

35

Name:

Date:

# Let's Count Pandas!



$2 - 1 = \bigcirc$

$7 - 3 = \bigcirc$

$6 - 5 = \bigcirc$

$10 - 5 = \bigcirc$

$8 - 4 = \bigcirc$

$4 - 2 = \bigcirc$

$7 - 1 = \bigcirc$

$9 - 1 = \bigcirc$