



4.3. Explore subtraction

Write the number sentence.

1) There are 8  on the farm.
6  run away.

How many are left?

$8 - 6 = 2$ are left.

3) There are 9  on th farm.
3  run away.

How many are left?

$9 - 3 = 6$ are left.

2) There are 5  on the farm.
2  run away.

How many are left?

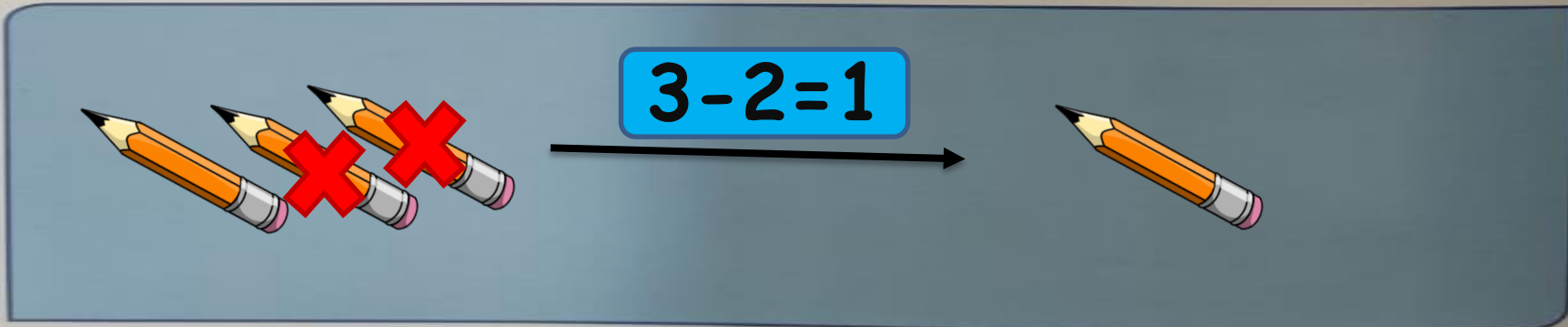
$5 - 2 = 3$ are left.

4) There are 4  on the farm.
2  run away.

How many are left?


$4 - 2 = 2$ are left.

Draw a picture. Tell a math's story about the picture.

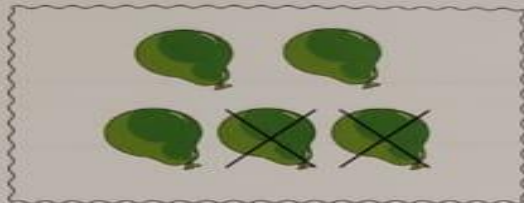


$3 - 2 = 1$

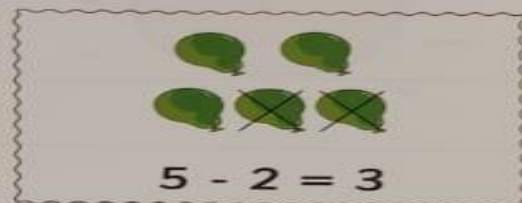
Show subtraction



Show how many.



Cross out to subtract.



Write the number sentence.
 $5 - 2 = 3$

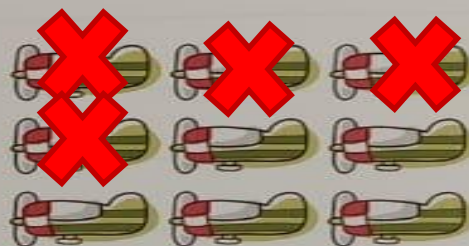
Cross out. Subtract.

1)



$6 - 4 = 2$

2)



$9 - 4 = 5$

3)



$8 - 7 = 1$

4)



$9 - 3 = 6$