



Level:

Staters 1



Alavi

Full Name: _____

Date: _____

Topic: _____

1405/2/24

Math

Stambo Resources

Name: _____

Equal to, Greater than, Less than

Write = < or > in the spaces below.

1. 19 ____ 35

9. 14 ____ 41

2. 37 ____ 21

10. 20 ____ 16

3. 11 ____ 11

11. 45 ____ 45

4. 42 ____ 29

12. 33 ____ 50

5. 44 ____ 55

13. 65 ____ 58

6. 20 ____ 20

14. 33 ____ 85

7. 84 ____ 48

15. 55 ____ 55

8. 21 ____ 21

16. 59 ____ 62

Worksheet 2



© 2020 Stambo Resources






Full Name: _____


Date: _____

Topic: _____

1405.2.24


Math

2) There are 6 .

6  slide away.

How many are left?

..... - = are left.

3) There are 7 .

4  run away.

How many are left?

..... - = are left.

Comment:





Level:

Starters 1



Alavi


Full Name: _____

Date: _____

Topic: _____

Math

1405.2.24



This is a ...circle... . It has
...1... side and ...0... corners.



This is a It has
..... sides and corners



This is a It has
..... sides and corners



This is a It has
..... sides and corners



This is a It has
..... sides and corners



This is a It has
..... sides and corners

Comment:





Level:

Starters 1




Full Name: _____

Date:

1405.2.24

Topic: _____


Math

3) There are 5  .

4 more  come.

How many in all?

..... and is.....

4) There are 9  .

3  run away.

How many are left?

..... - = are left.

Comment:

Handwriting practice lines for a comment.

