

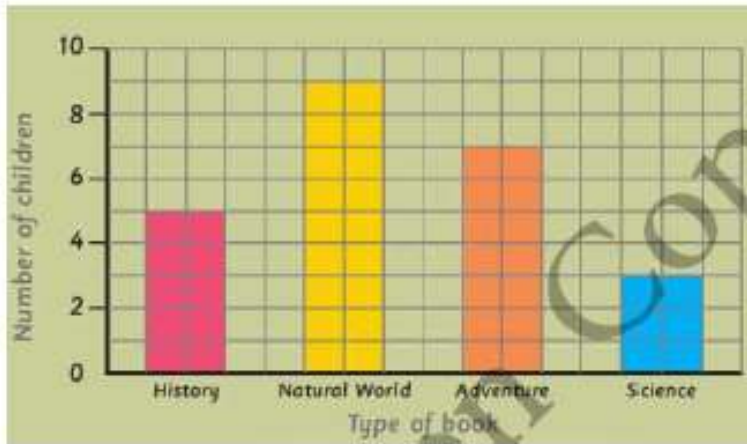
Full Name: _____

Date: _____

Topic: Math4

2/23

What is the most popular type of book?

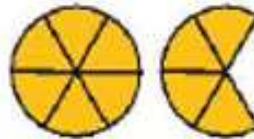


Describe each picture as an improper fraction and as a mixed number.

a)



b)



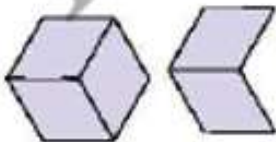
c)




d)



e)



f)



Comment:

