

Teacher's Name:

Date:

Student's Name:

Grade:

1. Read and circle.

- A. Three times five equals fifteen / twenty.
- B. Ten divided by two equals five / four.
- C. Double four is ten / eight.
- D. Half of six is three / one.

2. Look at the rectangle and write.



- A. Shade 2 parts.
- B. Write the fraction for parts that are shaded. _____
- C. What is the numerator? _____
- D. What is the denominator? _____

3. Read and answer.

- There are seven oranges in a bag. I buy five bags.
How many oranges have I got?

- I give one bag to a friend.
How many oranges have I got now?

- I buy two packs of chocolate. There are three bars in each pack.
How many chocolate bars have I got?



4. Read and solve the problem.

- There are six cupcakes in a box.
How many cakes are there in five boxes?

- I need 12 cupcakes. How many boxes should I buy?








5. Use the tally chart to answer the questions. **It shows student's favorite sport.**

- How many students like soccer?

- How many students like tennis?

- How many students like basketball
and baseball?

 Soccer	
 Tennis	
 Football	
 Baseball	
 Basketball	

6. I'm an even number. I'm between 850 and 860. I'm greater than 853 and less than 857. I have 6 ones.

What number am I?
