

الگویابی اعداد را ادامه بده .

$$12 - 14 - 16 - \quad - \quad - \quad - \quad - \quad - \quad -$$


$+2 \quad +2 \quad +2$

$$22 - 29 - 36 - \quad - \quad - \quad - \quad 64 - \quad - \quad - \quad - \quad 92$$

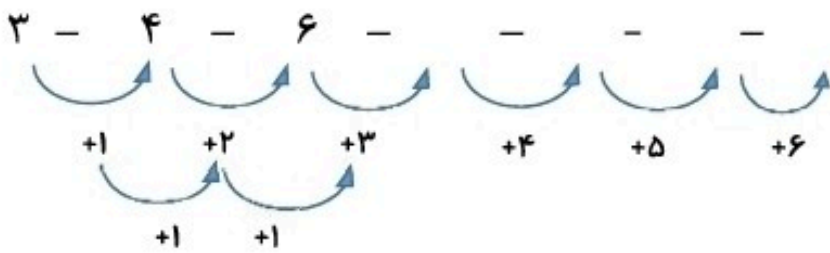

$+7 \quad +7 \quad +7$

$$30 - 35 - \quad - \quad - \quad - \quad - \quad - \quad - \quad - \quad -$$

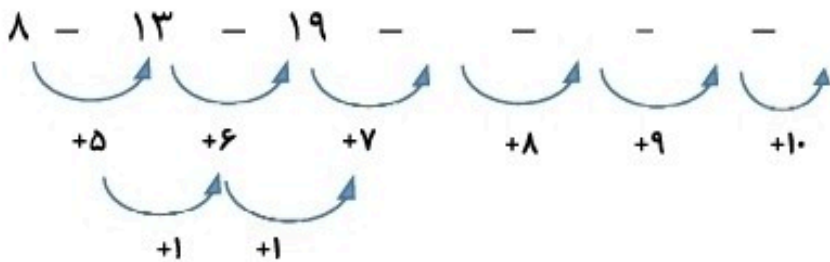

$+5 \quad +5 \quad +5$

$$11 - 20 - \quad - \quad - \quad - \quad - \quad - \quad - \quad - \quad -$$

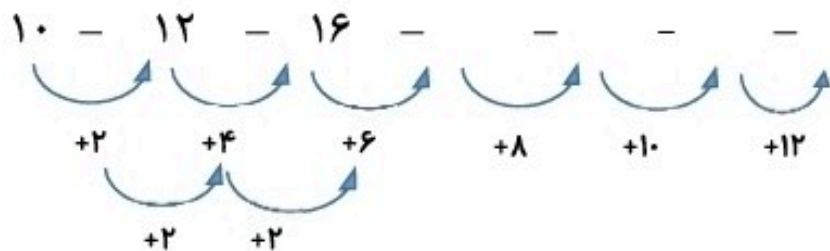

$+9 \quad +9 \quad +9$

$$3 - 4 - 6 - \quad - \quad - \quad - \quad - \quad - \quad - \quad - \quad -$$


$+1 \quad +2 \quad +3 \quad +4 \quad +5 \quad +6$
 $+1 \quad +1$

$$8 - 13 - 19 - \quad - \quad - \quad - \quad - \quad - \quad - \quad - \quad -$$


$+5 \quad +6 \quad +7 \quad +8 \quad +9 \quad +10$
 $+1 \quad +1$

$$10 - 12 - 16 - \quad - \quad - \quad - \quad - \quad - \quad - \quad - \quad -$$


$+2 \quad +4 \quad +6 \quad +8 \quad +10 \quad +12$
 $+2 \quad +2$