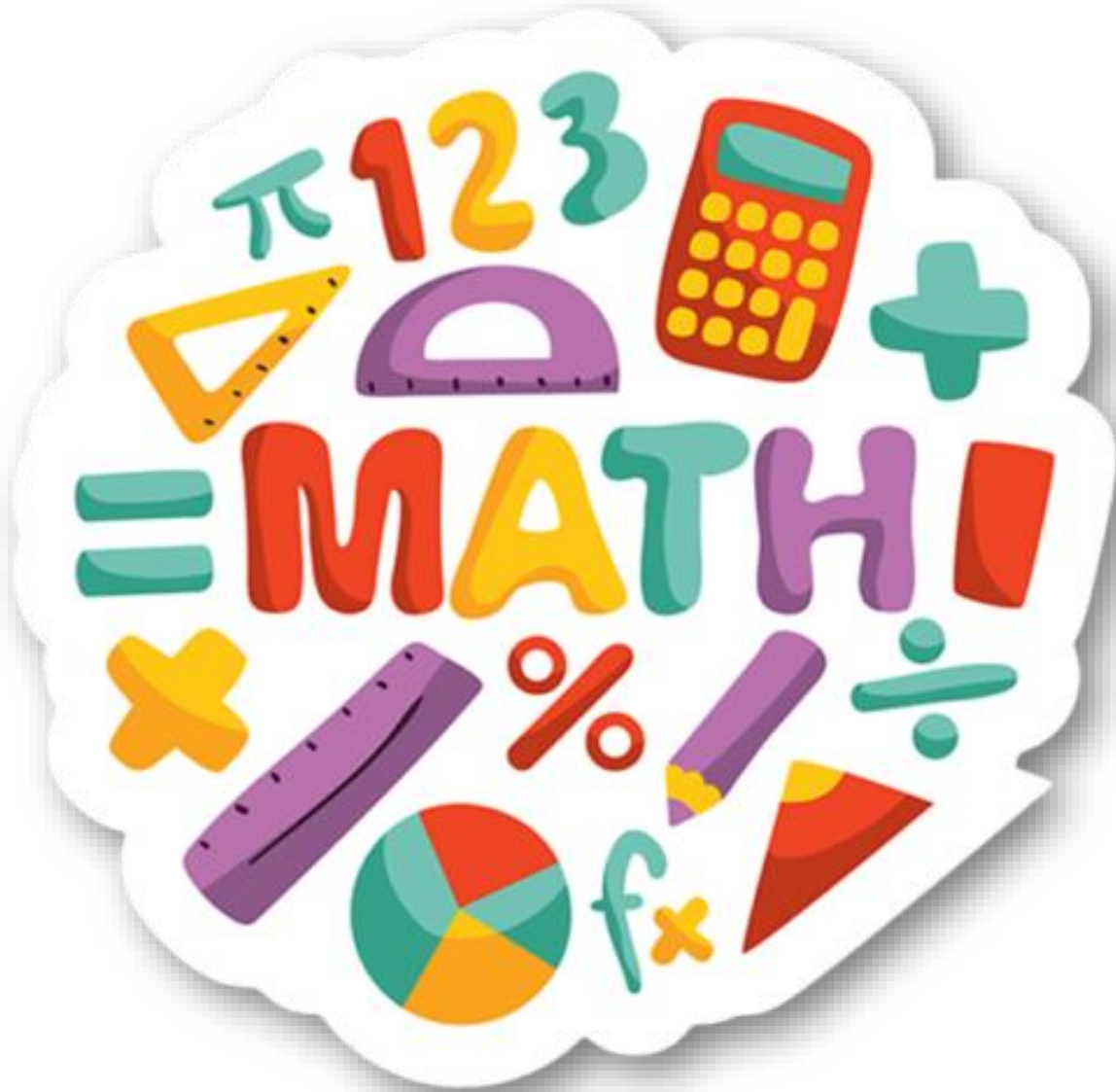


فصل دووم

جمع و تفريق



جمع و تفریق



۱- با رسم شکل حاصل جمع‌ها و تفریق‌های زیر را به دست آورید.

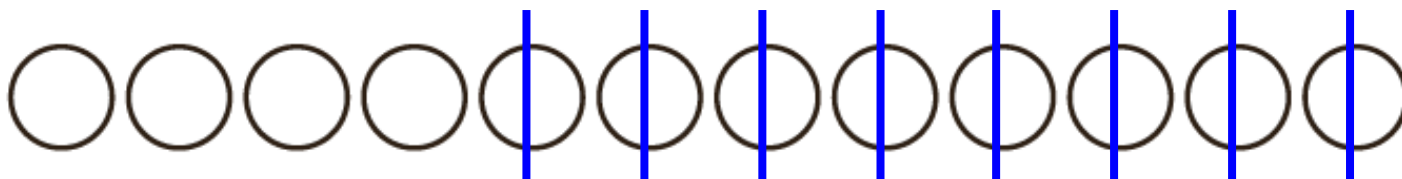
$$۴ + ۷ = ۱۱$$



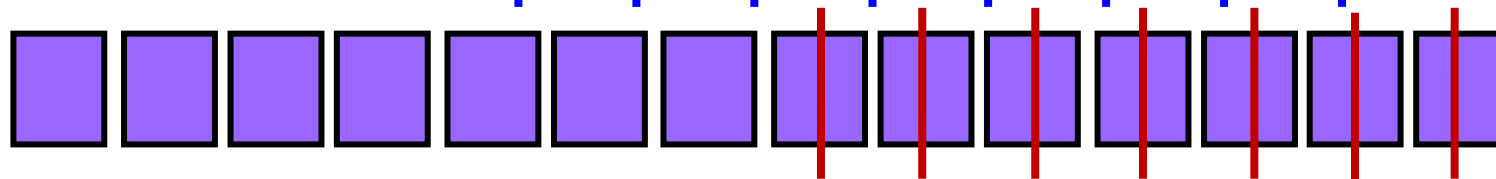
$$۶ + ۶ = ۱۲$$



$$۱۲ - ۸ = ۴$$



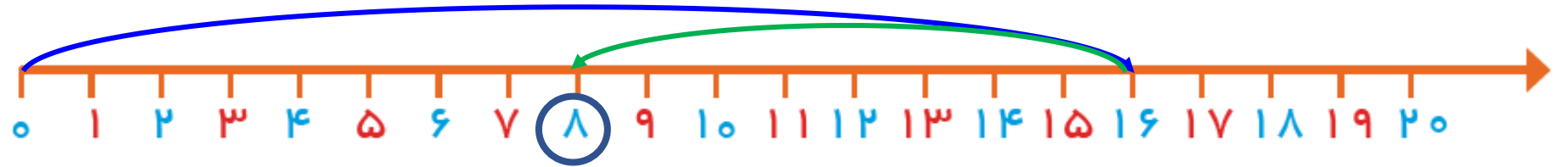
$$۱۴ - ۷ = ۷$$



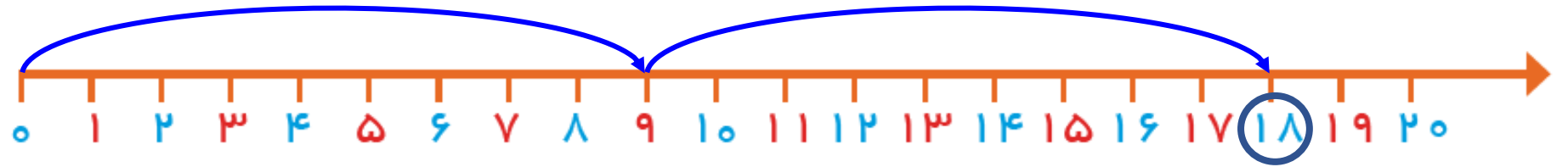
فعالیت

۲- با استفاده از محور جواب جمع‌ها و تفریق‌های زیر را به دست آورید.

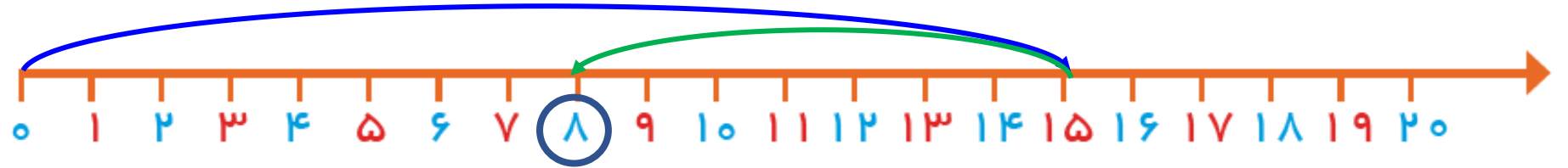
$$۱۶ - ۸ = ۸$$



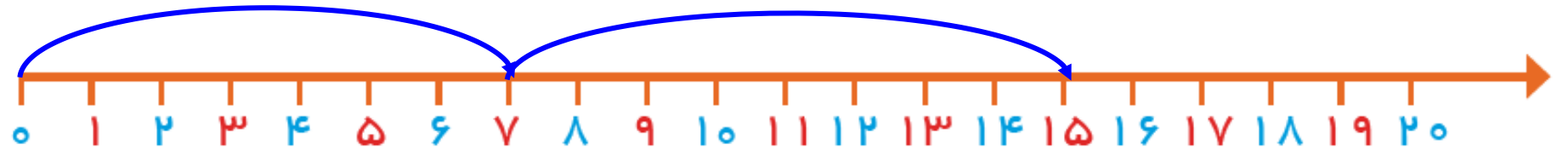
$$۹ + ۹ = ۱۸$$



$$۱۵ - ۷ = ۸$$



$$۷ + ۸ = ۱۵$$



۳- با رسم چوب خط حاصل جمع‌ها را پیدا کنید.

$$5 + 6 = 11$$
A number line starting at 0 and ending at 11. The number 5 is marked with a blue tick and the number 6 is marked with a brown tick. There are five blue diagonal lines between 0 and 5, and six brown diagonal lines between 5 and 11. A vertical line is drawn at 11.

$$7 + 6 = 13$$
A number line starting at 0 and ending at 13. The number 7 is marked with a green tick and the number 6 is marked with a blue tick. There are seven green diagonal lines between 0 and 7, and six blue diagonal lines between 7 and 13. A vertical line is drawn at 13.

$$8 + 8 = 16$$
A number line starting at 0 and ending at 16. The number 8 is marked with a red tick and the number 8 is marked with a blue tick. There are eight red diagonal lines between 0 and 8, and eight blue diagonal lines between 8 and 16. A vertical line is drawn at 16.

$$7 + 7 = 14$$
A number line starting at 0 and ending at 14. The number 7 is marked with a green tick and the number 7 is marked with a blue tick. There are seven green diagonal lines between 0 and 7, and seven blue diagonal lines between 7 and 14. A vertical line is drawn at 14.

برای پیدا کردن حاصل جمع و یا تفریق دو عدد یک رقمی راه‌های مختلفی وجود دارد. راه مورد علاقه شما کدام است؟ در این مورد با دوستان خود در کلاس گفت‌وگو کنید.