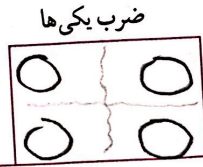
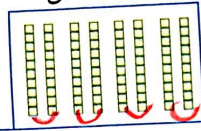


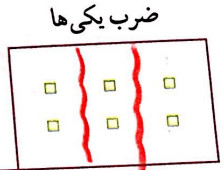
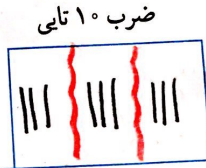

شکل را کامل کنید. سپس حاصل ضرب هر بخش را در قسمت مربوط بنویسید.

$$\begin{array}{r} 20 \\ 21 \\ \times 4 \\ \hline 80 \\ + 84 \\ \hline 84 \end{array}$$



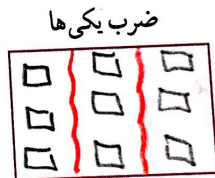
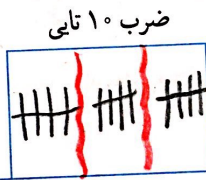
$$200 + 20 + 2$$

$$\begin{array}{r} 222 \\ \times 3 \\ \hline 600 \\ + 60 \\ + 6 \\ \hline 666 \end{array}$$



$$50 + 3$$

$$\begin{array}{r} 52 \\ \times 3 \\ \hline 150 \\ + 6 \\ \hline 156 \end{array}$$



$$200 + 20 + 1$$

$$\begin{array}{r} 221 \\ \times 5 \\ \hline 1000 \\ + 200 \\ + 5 \\ \hline 1105 \end{array}$$

