





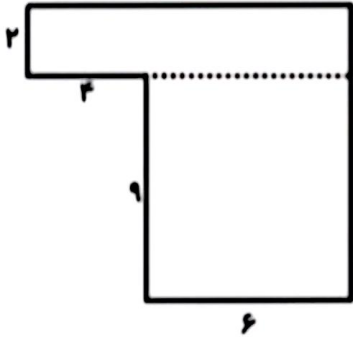
موضوع:

تاریخ:

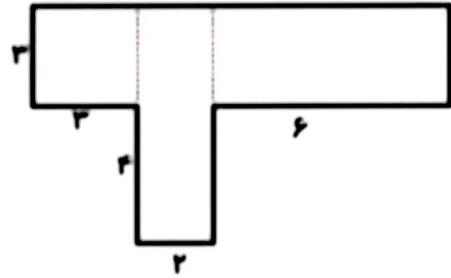
نام و نام خانوادگی:

هدف:

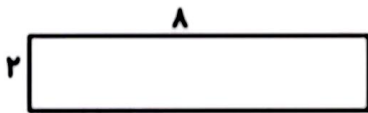
مساحت شکل های زیر را بدست آورید .



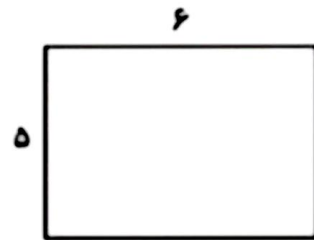
مساحت = .....



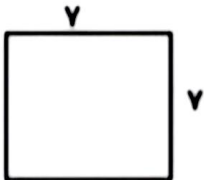
مساحت = .....



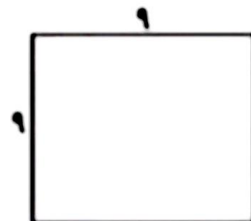
مساحت = .....



مساحت = .....



مساحت = .....



مساحت = .....

