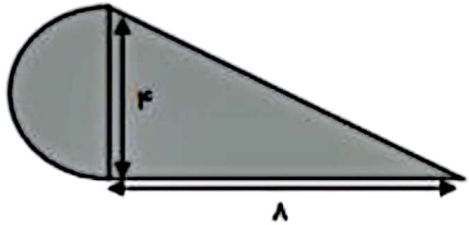


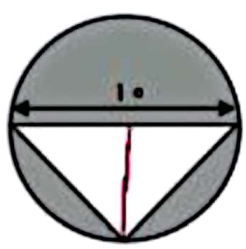
$10 \times 10 = 100$
 $10 \times 10 = 100$
 $100 - 75 = 25$

مساحت دایره
 مساحت کل
 مساحت بزرگی



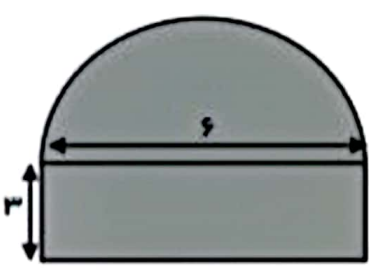
$4 \div 2 = 2$
 $2 \times 2 \times \pi = 25$
 $20 - 25 = 5$

مساحت مربع $(4 \times 4) \div 2 = 8$
 $8 + 8 = 16$



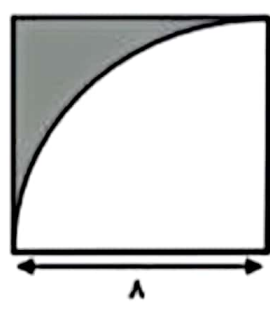
$10 \div 2 = 5$
 $5 \times 5 \times \pi = 75$
 $75 - 25 = 50$

مساحت دایره $(10 \times 5) \div 2 = 25$
 مساحت بزرگی



$4 \div 2 = 2$
 $2 \times 2 \times \pi = 27$
 $27 + 18 = 45$

مساحت دایره $4 \times 4 = 16$
 مساحت بزرگی



$8 \times 8 \times \pi = 64$
 $8 \times 8 = 64$
 $64 - 16 = 48$

مساحت دایره $4 \times 4 = 16$
 مساحت مربع