



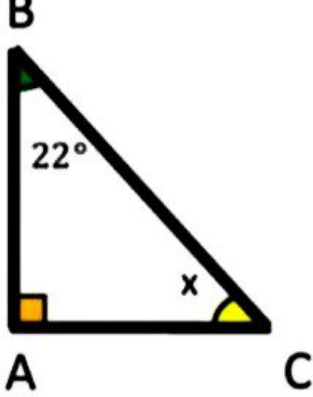
موضوع:

تاریخ:

نام و نام خانوادگی:

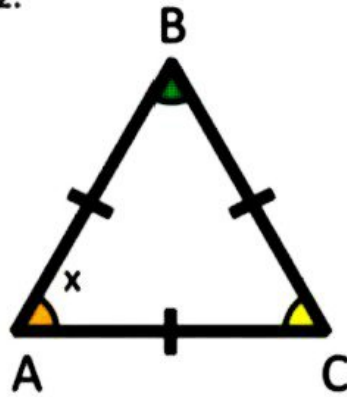
هدف:

1. Find the missing angle




Answer: $x = \underline{\hspace{1cm}}$ °

2.



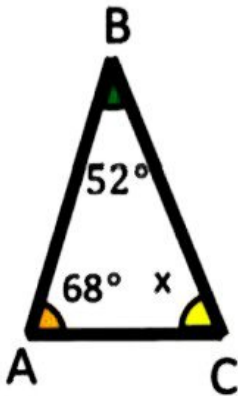
Answer: $x = \underline{\hspace{1cm}}$ °

3.



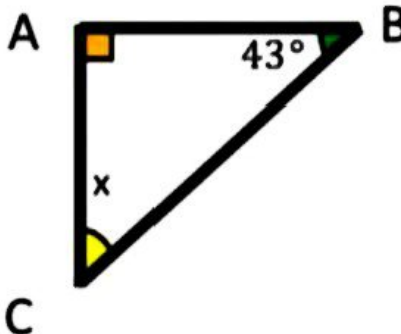
Answer: $x = \underline{\hspace{1cm}}$ °

4.



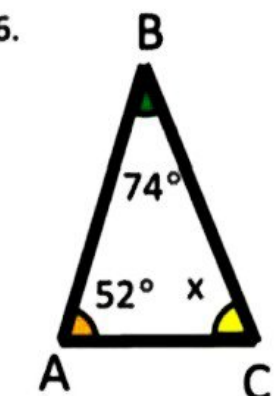
Answer: $x = \underline{\hspace{1cm}}$ °

5.



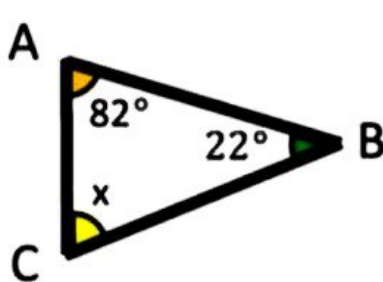
Answer: $x = \underline{\hspace{1cm}}$ °

6.



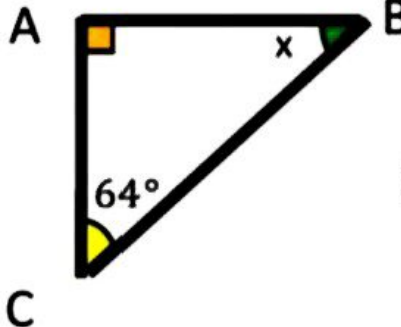
Answer: $x = \underline{\hspace{1cm}}$ °

7.



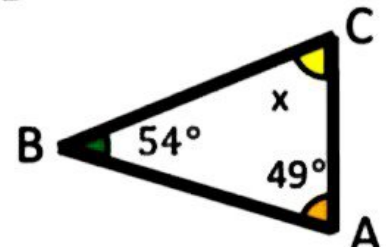
Answer: $x = \underline{\hspace{1cm}}$ °

8.



Answer: $x = \underline{\hspace{1cm}}$ °

9.



Answer: $x = \underline{\hspace{1cm}}$ °

بازخورد:

Handwriting practice area with a dashed border and several horizontal lines.

