


LO: I can relate equal groups to repeated addition




There are _____ equal groups with _____ in each group.

$$\underline{\quad} + \underline{\quad} + \underline{\quad} =$$



There are _____ equal groups with _____ in each group.

$$\underline{\quad} + \underline{\quad} + \underline{\quad} + \underline{\quad} =$$



There are _____ equal groups with _____ in each group.

$$\underline{\quad} + \underline{\quad} + \underline{\quad} =$$




There are _____ equal groups with _____ in each group.

$$\underline{\quad} + \underline{\quad} + \underline{\quad} + \underline{\quad} + \underline{\quad} =$$



There are _____ equal groups with _____ in each group.

$$\underline{\quad} + \underline{\quad} + \underline{\quad} =$$



There are _____ equal groups with _____ in each group.

$$\underline{\quad} + \underline{\quad} + \underline{\quad} + \underline{\quad} + \underline{\quad} =$$



There are _____ equal groups with _____ in each group.

$$\underline{\quad} + \underline{\quad} + \underline{\quad} =$$